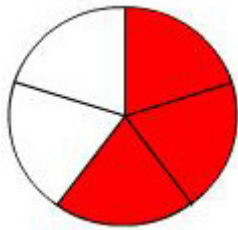


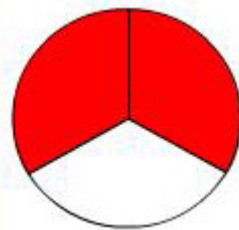
Hoe groot is het rode deel? En het witte deel?



Hele taart: $\frac{5}{5}$

Rode deel:

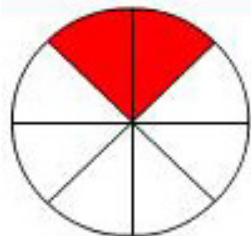
Witte deel:



Hele taart: $\frac{3}{3}$

Rode deel:

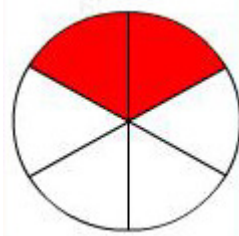
Witte deel:



Hele taart: $\frac{8}{8}$

Rode deel:

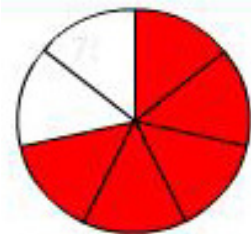
Witte deel:



Hele taart: $\frac{6}{6}$

Rode deel:

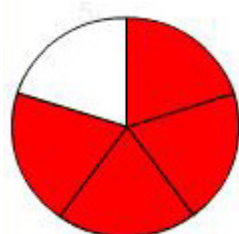
Witte deel:



Hele taart: $\frac{7}{7}$

Rode deel:

Witte deel:



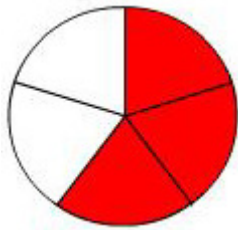
Hele taart: $\frac{5}{5}$

Rode deel:

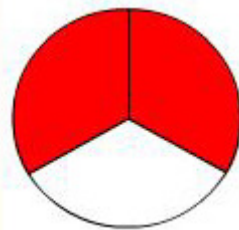
Witte deel:



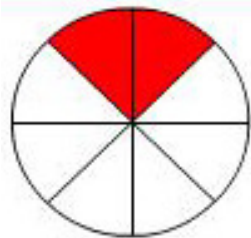
Antwoorden



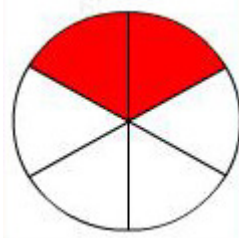
Hele taart: $\frac{5}{5}$
Rode deel: $\frac{3}{5}$
Witte deel: $\frac{2}{5}$



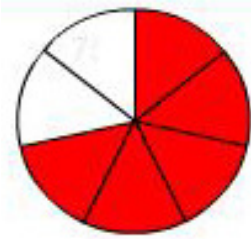
Hele taart: $\frac{3}{3}$
Rode deel: $\frac{2}{3}$
Witte deel: $\frac{1}{3}$



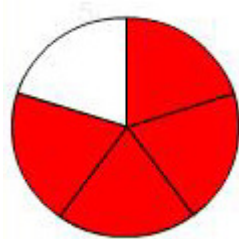
Hele taart: $\frac{8}{8}$
Rode deel: $\frac{2}{8}$
Witte deel: $\frac{6}{8}$



Hele taart: $\frac{6}{6}$
Rode deel: $\frac{2}{6}$
Witte deel: $\frac{4}{6}$



Hele taart: $\frac{7}{7}$
Rode deel: $\frac{5}{7}$
Witte deel: $\frac{2}{7}$



Hele taart: $\frac{5}{5}$
Rode deel: $\frac{4}{5}$
Witte deel: $\frac{1}{5}$

